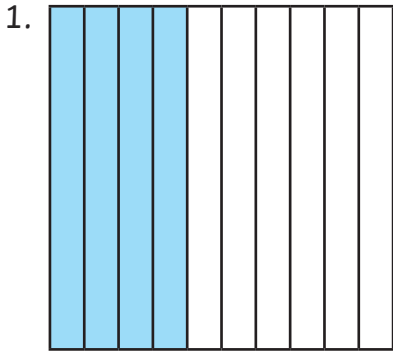


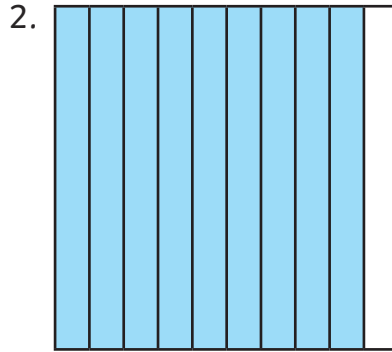
# Fractions: Tenths

All the squares below have been separated into ten equal parts. Each part is  $\frac{1}{10}$ . To write this as a decimal fraction you would write 0.1. For all the squares below, write the fraction shaded both as a fraction and a decimal fraction.



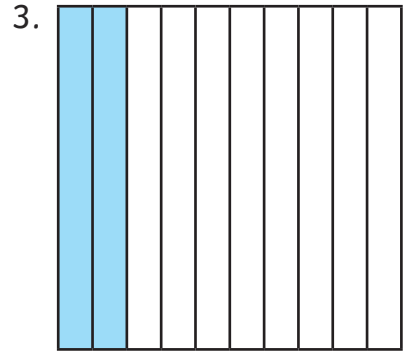
Fraction: \_\_\_\_\_

Decimal: \_\_\_\_\_



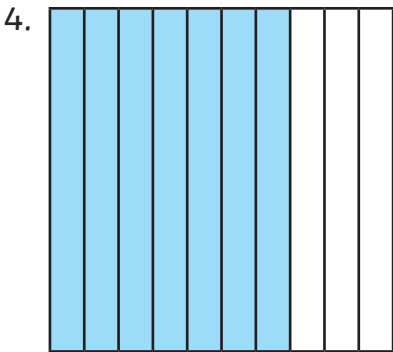
Fraction: \_\_\_\_\_

Decimal: \_\_\_\_\_



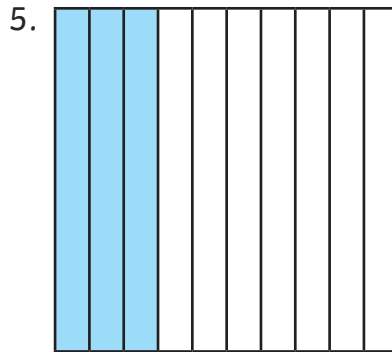
Fraction: \_\_\_\_\_

Decimal: \_\_\_\_\_



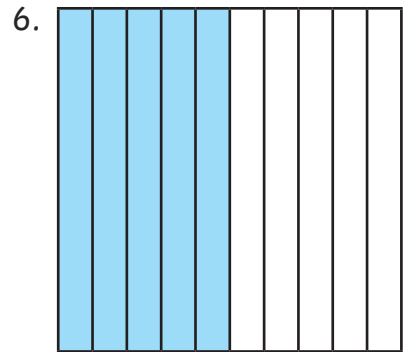
Fraction: \_\_\_\_\_

Decimal: \_\_\_\_\_



Fraction: \_\_\_\_\_

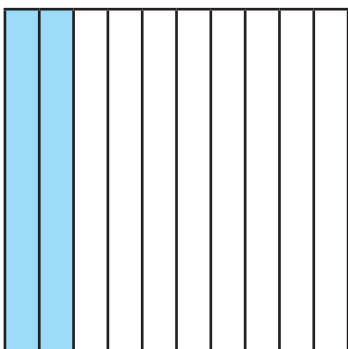
Decimal: \_\_\_\_\_



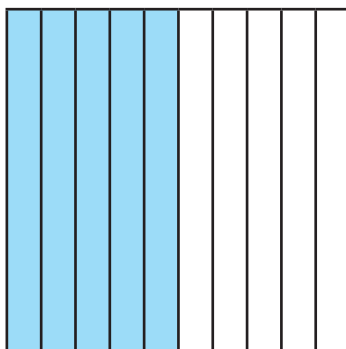
Fraction: \_\_\_\_\_

Decimal: \_\_\_\_\_

Challenge: Look at the two squares below. Write the total number of tenths shaded as a fraction and decimal fraction.



+



=

Fraction: \_\_\_\_\_

Decimal: \_\_\_\_\_

# Fractions: Tenths **Answers**

1. Fraction:  $\frac{4}{10}$

Decimal: **0.4**

2. Fraction:  $\frac{9}{10}$

Decimal: **0.9**

3. Fraction:  $\frac{2}{10}$

Decimal: **0.2**

4. Fraction:  $\frac{7}{10}$

Decimal: **0.7**

5. Fraction:  $\frac{3}{10}$

Decimal: **0.3**

6. Fraction:  $\frac{5}{10}$

Decimal: **0.5**

Challenge:  $\frac{2}{10} + \frac{5}{10} = \frac{7}{10}$

**0.2 + 0.5 = 0.7**